


Thursday

Year 3 Simmering:

Flashback 4

Year 3 | Week 10 | Day 4



1) How many fifths make one whole?

2) Find the perimeter of the rectangle.



3) How many metres are equal to 400 centimetres?


4) How much money is there altogether?



Year 4 Simmering:

Flashback 4

Year 4 | Week 9 | Day 4

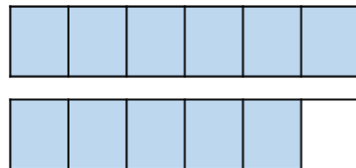


1) Write 3 tenths as a decimal.

2) Complete.

$$\frac{1}{6} \text{ of } \square = 8$$

3) How many sixths are there altogether?




4) Subtract 1,250 from 5,000

Simmering Answers:

Flashback 4

Year 3 | Week 10 | Day 4

1) How many fifths make one whole? **5**



2) Find the perimeter of the rectangle.




32 cm

3) How many metres are equal to 400 centimetres? **4**

4) How much money is there altogether?



£11 and 52 p

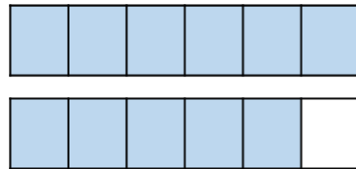


1) Write 3 tenths as a decimal. 0.3

2) Complete.

$$\frac{1}{6} \text{ of } \boxed{48} = 8$$

3) How many sixths are there altogether?



11 sixths

4) Subtract 1,250 from 5,000 3,750

Negative numbers



Solve these sums. Use the number line to help you. Remember: more means we count up, less means that we count back.

*	**	***
1) What is 3 less than 2? 2) What is 5 less than 1? 3) What is 8 less than 4? 4) What is 10 less than 6? 5) What is 1 less than -2? 6) What is 3 less than -1? 7) What is 5 more than -2? 8) What is 6 more than -3? 9) What is 2 more than 0? 10) What is 3 more than -2?	1) What is 7 less than 3? 2) What is 4 less than 1? 3) What is 5 less than -2? 4) What is 6 more than -3? 5) What is 8 more than -2? 6) $7-9=$ 7) $10-14=$ 8) $13-18=$ 9) $-4+6=$ 10) $-5+8=$	1) $19-22=$ 2) $11-14=$ 3) $15-20=$ 4) $7-12=$ 5) $8-19=$ 6) $-14+20$ 7) $-13+15$ 8) $-2+6=$ 9) $-5+12$ 10) $-8+19$

Answers

*	**	***
1) What is 3 less than 2? -1 2) What is 5 less than 1? -4 3) What is 8 less than 4? -4 4) What is 10 less than 6? -4 5) What is 1 less than -2? -3 6) What is 3 less than -1? -4 7) What is 5 more than -2? 3 8) What is 6 more than -3? 3 9) What is 2 more than 0? 2 10) What is 3 more than -2? 1	1) What is 7 less than 3? -4 2) What is 4 less than 1? -3 3) What is 5 less than -2? -7 4) What is 6 more than -3? 3 5) What is 8 more than -2? 6 6) $7-9=$ -2 7) $10-14=$ -4 8) $13-18=$ -5 9) $-4+6=$ 2 10) $-5+8=$ 3	1) $19-22=$ -3 2) $11-14=$ -3 3) $15-20=$ -5 4) $7-12=$ -5 5) $8-19=$ -11 6) $-14+20=$ 6 7) $-13+15=$ 2 8) $-2+6=$ 4 9) $-5+12=$ 7 10) $-8+19=$ 11