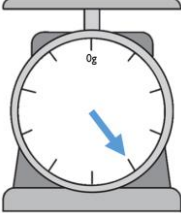



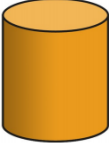




Name: _____

Date: _____

Quiz 3

1	Answer	5	Answer	9	Answer	13	Answer
..... + 24 = 54		Find the missing number 52 - □ = 45		This scale goes up in steps of 10g. How much is on the scale? 	g	How many vertices does this shape have? 	
2	Answer	6	Answer	10	Answer	14	Answer
42+36=		Pencils come in boxes of 10. How many pencils in 4 boxes?		Write the time shown on the clock. 		How many sides does a circle have?	
45+27=							
3	Answer	7	Answer	11	Answer	15	Answer
58+21= about 80 True or false?		Shade half of the shape. 		How many edges does this shape have? 		How many corners does a triangle have?	
4	Answer	8	Answer	12	Answer	16	
76-32=		This is one way to make 31p  How else could you make 31p?		How many faces does this shape have? 		Draw a line of symmetry on this shape 