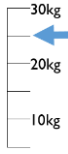

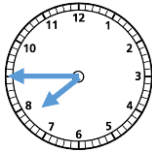

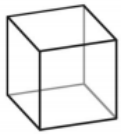




Name: _____

Date: _____

Quiz 1

1	Answer	5	Answer	9	Answer	13	Answer
23 can be written as 20 + 3. Split 23 in a different way.		Use the numbers 5, 6 and 11 to write another calculation $5 + 6 = 11$		What mass is the scale showing? 	kg	How many vertices does this shape have? 	
2	Answer	6	Answer	10	Answer	14	Answer
23+42=		$2 \times 6 = \square \times 2$		Write the time shown on the clock. 		How many sides does a pentagon have?	
28+35=							
3	Answer	7	Answer	11	Answer	15	Answer
25+14= a. about 30 b. about 40 c. about 50		How much of the shape is shaded? 		How many edges does this shape have? 		How many corners does a rectangle have?	
4	Answer	8	Answer	12	Answer	16	
76-30=		This is one way to make 12p  How else could you make 12p?		How many faces does this shape have?  sphere		Draw a line of symmetry on this shape 