


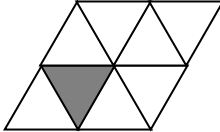
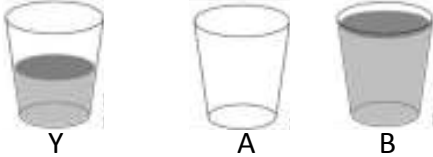


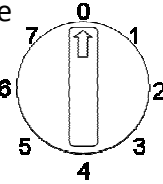


Name: \_\_\_\_\_

Date: \_\_\_\_\_

Class/Group: \_\_\_\_\_

A: Number and Place Value		B: Fractions and Measure		C: Measure and Geometry	
1. What is the total score on the dice? 	1:1	11. Circle ½ of the sweets. 	1:11	16. I go to school in the: a. afternoon. b. evening. c. morning. 	1:16
2. What is the missing number? 10 <input type="text"/> 30 40 50	1:2				
3. What number is one <b>less</b> than 46?	1:3	12. Finish shading in a <b>quarter</b> of this shape. 	1:12	17. There are twelve months in a... a. year. b. week. c. day.	1:17
4. Circle the right phrase: 9 is <b>less than/equal to/more than</b> 3x4	1:4				
5. Write this number in numerals: eleven	1:5	13. Which cup has <b>less</b> than 'Y'? 	1:13	18. What time does this clock show? 	1:18
6. What symbol is missing? 6 <input type="text"/> 1 = 7	1:6				
7. What is the missing number? 20 - <input type="text"/> = 4	1:7	14. A man times himself running a marathon. Which number represents the seconds? <b>04:38:28</b>	1:14	19. Complete the rectangle. _____ . . . . . . . . . . . . . . . . . . .	1:19
8. 9 + 16 =	1:8				
9. Jo has 15 sweets. After eating some she has 8 left. How many did she eat?	1:9	15. How much altogether? 	1:15	20. What number will the dial be pointing to after a quarter turn anticlockwise? 	1:20
10. Eggs come in boxes of 6. If I buy 3 boxes, how many eggs do I have?	1:10				
Total (A)		Total (B)		Total (C)	
Test Total (A+B+C)		R (0-7)	Y (8-15)	G (16-20)	