

## Wednesday Simmering


*	**	***
1. $34 \times 10$ 2. $710 \div 10$ 3. $521 + 136$ 4. $562 - 141$ 5. $32 \times 3$ 6. $76 \div 2$ 7. Write in digits: Four hundred and seventy-one 8. Round 75 to the nearest 10.	1. $56 \times 100$ 2. $9500 \div 100$ 3. $643 + 198$ 4. $797 - 288$ 5. $63 \times 4$ 6. $134 \div 4$ 7. Write in digits: One thousand, three hundred and eighty-five 8. Round 187 to the nearest 10 and 100.	1. $6.2 \times 1000$ 2. $11500 \div 1000$ 3. $2347 + 3748$ 4. $6362 - 2568$ 5. $152 \times 4$ 6. $524 \div 8$ 7. Write in digits: Thirteen thousand, eight hundred and four 8. Round 2876 to the nearest 10, 100 and 1000

Answers:

*	**	***
<p>1. <math>34 \times 10 = 340</math></p> <p>2. <math>710 \div 10 = 71</math></p> <p>3. <math>521 + 136 = 657</math></p> <p>4. <math>562 - 141 = 421</math></p> <p>5. <math>32 \times 3 = 96</math></p> <p>6. <math>76 \div 2 = 36</math></p> <p>7. Write in digits: Four hundred and seventy-one <b>471</b></p> <p>8. Round 75 to the nearest 10. <b>80</b></p>	<p>1. <math>56 \times 100 = 5600</math></p> <p>2. <math>9500 \div 100 = 95</math></p> <p>3. <math>643 + 198 = 841</math></p> <p>4. <math>797 - 288 = 509</math></p> <p>5. <math>63 \times 4 = 252</math></p> <p>6. <math>134 \div 4 = 33r2</math></p> <p>7. Write in digits: One thousand, three hundred and eighty-five <b>1385</b></p> <p>8. Round 187 to the nearest 10 and 100. <b>190, 200</b></p>	<p>1. <math>6.2 \times 1000 = 6200</math></p> <p>2. <math>11500 \div 1000 = 11.5</math></p> <p>3. <math>2347 + 3748 = 6095</math></p> <p>4. <math>6362 - 2568 = 8930</math></p> <p>5. <math>152 \times 4 = 608</math></p> <p>6. <math>524 \div 8 = 65r4</math></p> <p>7. Write in digits: Thirteen thousand, eight hundred and four <b>13804</b></p> <p>8. Round 2876 to the nearest 10, 100 and 1000 <b>2880, 2900, 3000</b></p>

Reading scales – Weight \*

1)




\_\_\_\_\_ kg

2)



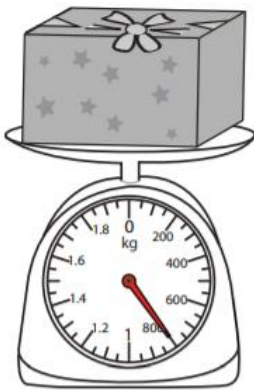
\_\_\_\_\_ g

3)




\_\_\_\_\_ kg

4)



\_\_\_\_\_ g

5)



\_\_\_\_\_ kg

6)



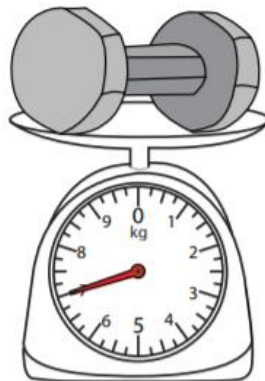
\_\_\_\_\_ kg

7)



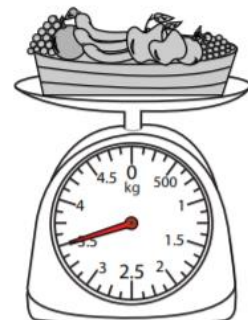
\_\_\_\_\_ g

8)



\_\_\_\_\_ kg

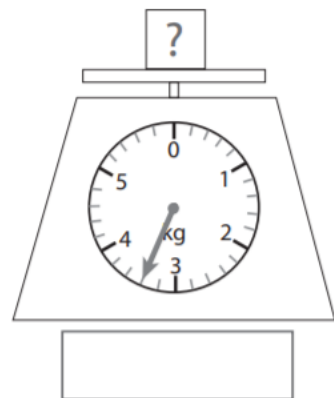
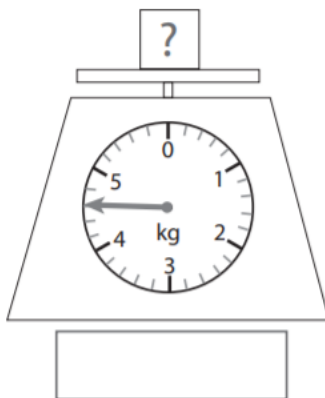
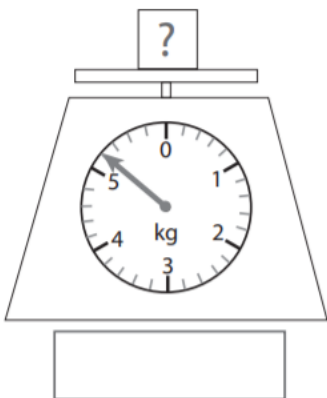
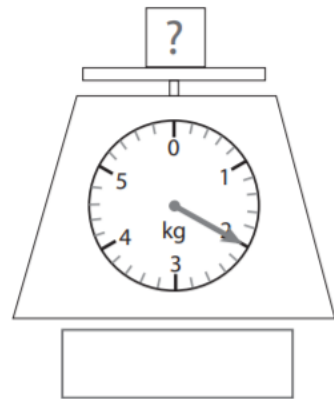
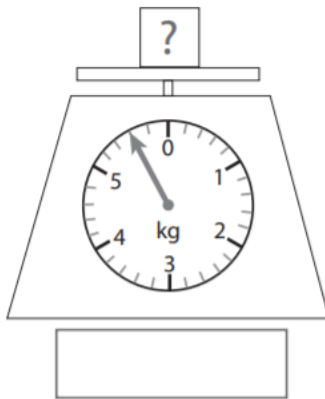
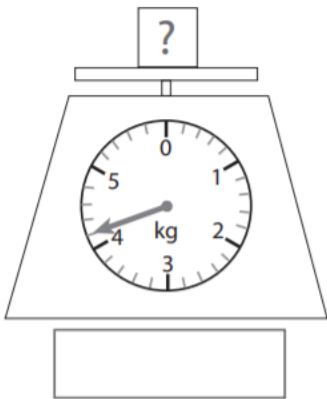
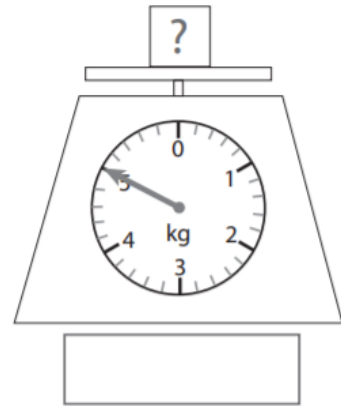
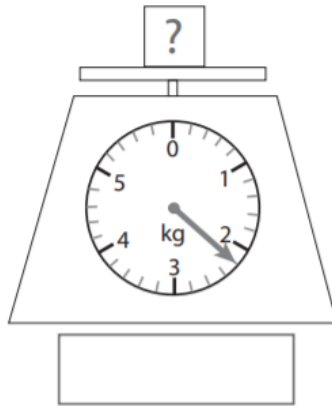
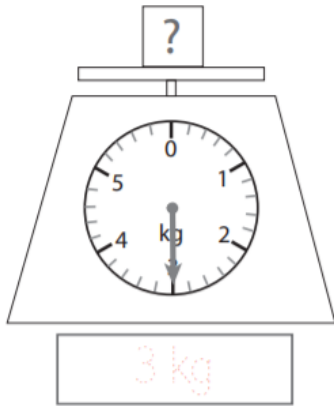
9)



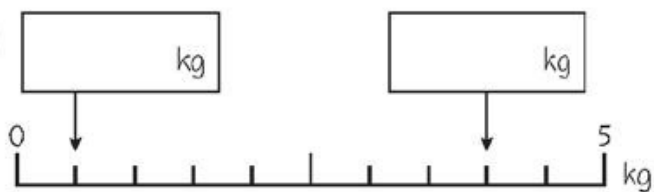
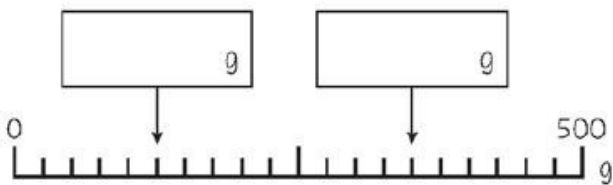
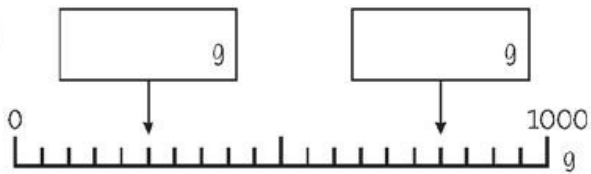
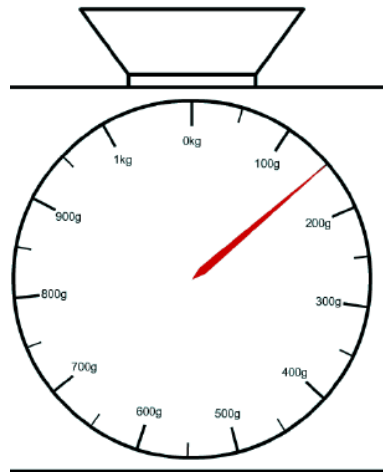
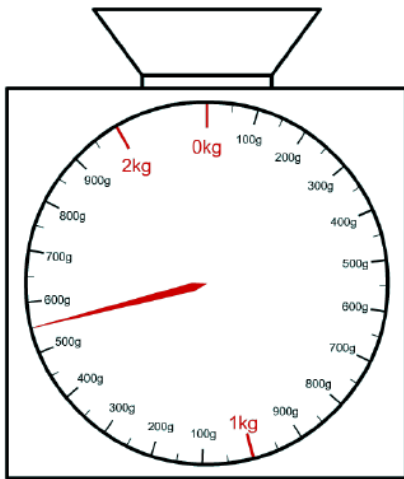
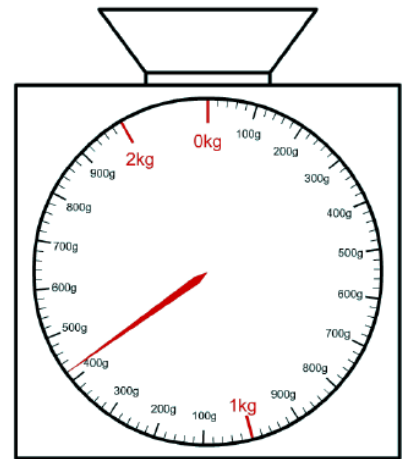
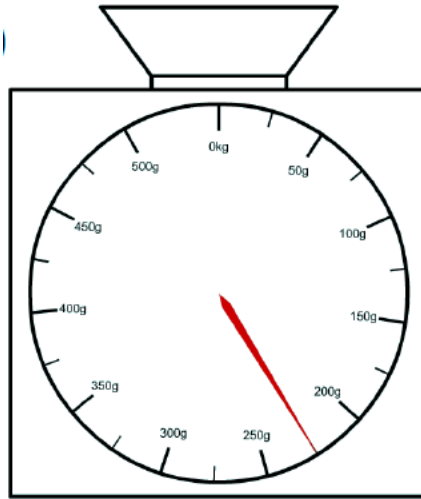
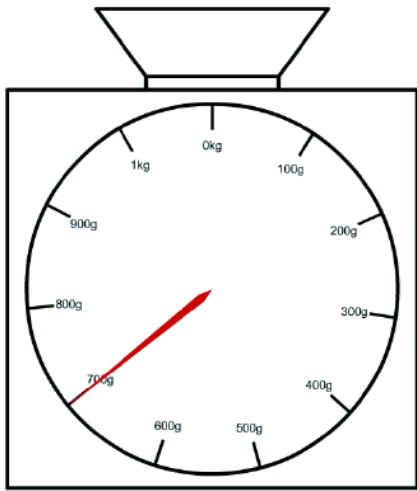
\_\_\_\_\_ kg

# Reading scales – Weight \*\*

Read the scales and write the weights shown



# Reading Scales \*\*\*



## Answers

\*

1. 2kg
2. 700g
3. 5kg
4. 800g
5. 1.5kg
6. 8kg
7. 500g
8. 7kg
9. 3.5kg

\*\*

1. 3kg
2. 2.2kg
3. 5kg
4. 4.2kg
5. 5.6kg
6. 2kg
7. 5.2kg
8. 4.6kg
9. 3.4kg

\*\*\*

1. 700g
2. 225g
3. 1.425kg

4. 1.55kg

5. 150g

6. 250g, 800g

7. 125g, 350g

8. 0.5kg, 4kg