
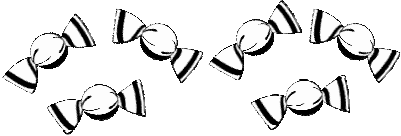
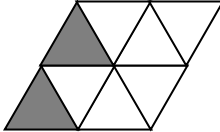



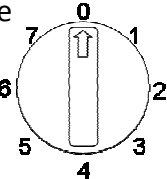


Name: _____

Date: _____

Class/Group: _____

A: Number and Place Value		B: Fractions and Measure		C: Measure and Geometry	
1. What is the total score on the dice? 	1:1	11. Circle ½ of the sweets. 	1:11	16. If today is Tuesday, then Monday: a. is today. b. is tomorrow. c. was yesterday.	1:16
2. What is the missing number? □ 20 30 40 50	1:2		12. What fraction of this shape is shaded? 		1:12
3. What number is one more than 73?	1:3	13. Circle the animal that is quicker than the other. 	1:13	18. What time does this clock show? 	1:18
4. Circle the right phrase: 8 is less than/equal to/more than 2x4	1:4				
5. Write this number in numerals: sixteen	1:5	15. How much altogether? 	1:15	20. What number will the dial be pointing to after a half turn? 	1:20
6. What symbol is missing? 6 □ 1 = 5	1:6				
7. What is the missing number? 20 - □ = 7	1:7	Total (A)		Total (B)	
8. 9 + 6 =	1:8	Total (C)		Total (C)	
Test Total (A+B+C)		R (0-7)	Y (8-15)	G (16-20)	