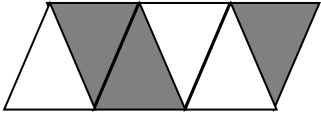


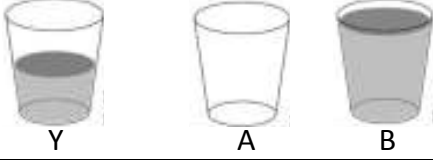
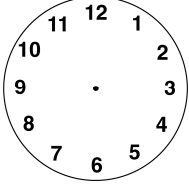
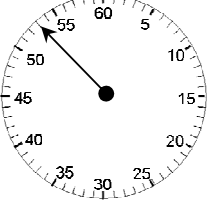
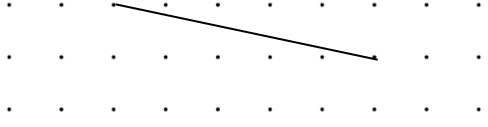

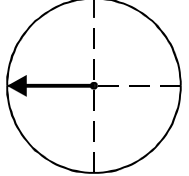


Name: _____

Date: _____

Class/Group: _____

| A: Number and Place Value | | B: Fractions and Measure | | C: Measure and Geometry | |
|--|------|---|----------|--|------|
| 1. What is the missing number? 78 79 80 81 <input type="text"/> | 1:1 | 11. What fraction is coloured?  | 1:11 | 16. I go put on my swimming costume _____ I go swimming. a. before b. after  | 1:16 |
| 2. What is the missing number? 5 <input type="text"/> 15 20 25 | 1:2 | | | | |
| 3. What number is one less than 1? | 1:3 | 12. A cake is cut into quarters . How many pieces are there?  | 1:12 | 17. If Wednesday is the 3 rd day of the week, what day is the 1 st day of the week? a. Monday b. Friday c. Sunday | 1:17 |
| 4. Pat has 13 sweets. Sam has 11. Who has the most ? | 1:4 | | | | |
| 5. Write this number in words: 12 | 1:5 | 13. Which cup has more than 'Y'?  | 1:13 | 18. Draw the hands to show: 2 o'clock  | 1:18 |
| 6. What symbol is missing? 9 <input type="text"/> 8 = 1 | 1:6 | | | | |
| 7. What is the missing number? 9 + <input type="text"/> = 20 | 1:7 | 14. A girl times how long it takes her to tie her shoelaces. How long does it take?  | 1:14 | 19. Complete this triangle.  | 1:19 |
| 8. 13 - 4 = | 1:8 | | | | |
| 9. What is the missing number? 16 = <input type="text"/> - 8 | 1:9 | 15. How much altogether?  | 1:15 | 20. The arrow points: a. left b. up c. right  | 1:20 |
| 10. There are 6 sweets in a bag. How many sweets do I get in 3 bags? | 1:10 | | | | |
| Total (A) | | Total (B) | | Total (C) | |
| Test Total (A+B+C) | | R (0-7) | Y (8-15) | G (16-20) | |