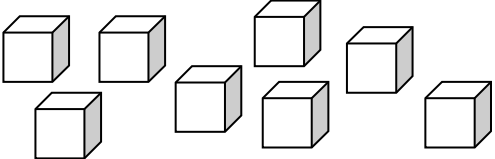
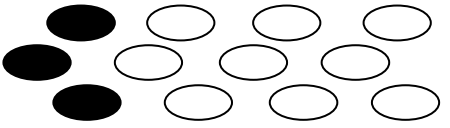

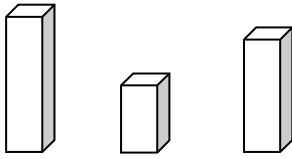
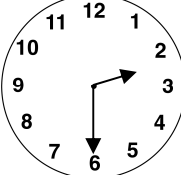






Name: _____

Date: _____

Class/Group: _____

A: Number and Place Value		B: Fractions and Measure		C: Measure and Geometry	
1. What is the missing number? 22 23 24 <input type="text"/> 26	1:1	11. Circle $\frac{1}{2}$ of the bricks. 	1:11	16. When putting on socks and shoes, I put my socks on a. after b. first c. last	1:16
2. What is the missing number? <input type="text"/> 4 6 8 10	1:2				
3. What number is one more than 59?	1:3	12. What fraction of the counters are black? 	1:12	17. What is the last month of the year? a. January b. December c. November	1:17
4. What number is labelled? 	1:4				
5. Write this number in words: 8	1:5	13. Circle the tallest tower. 	1:13	18. What time does this clock show? 	1:18
6. What symbol is missing? 7 + 8 <input type="text"/> 15	1:6				
7. What is the missing number? 11 + <input type="text"/> = 20	1:7	14. How much water is in the bowl? 	1:14	19. Tick the sphere . 	1:19
8. 14 + 9 =	1:8				
9. There are 13 people on a bus. 4 get on. How many people are there now?	1:9	15. How much altogether? 	1:15	20. The teddy bear is: a. on the chair. b. behind the chair. c. in front of the chair. 	1:20
10. 6 toys are shared by 3 children. How many toys do they get each?	1:10				
Total (A)		Total (B)		Total (C)	
Test Total (A+B+C)		R (0-7)		Y (8-15)	
				G (16-20)	