




Halves and Doubles

Learning Intention: I can find halves and doubles.

Halves and doubles are the opposite of each other. If we know half of 10 is 5, then we know that double 5 is 10!



$$\boxed{3} + \boxed{3} = \boxed{6}$$



half of $\boxed{6}$ is $\boxed{3}$

$$\boxed{4} + \boxed{4} = \boxed{}$$

half of $\boxed{8}$ is $\boxed{}$

$$\boxed{5} + \boxed{} = \boxed{}$$

half of $\boxed{10}$ is $\boxed{}$



$$\boxed{} + \boxed{} = \boxed{}$$

half of $\boxed{}$ is $\boxed{}$

$$\boxed{} + \boxed{} = \boxed{}$$

half of $\boxed{}$ is $\boxed{}$




$$\boxed{} + \boxed{} = \boxed{}$$

half of $\boxed{}$ is $\boxed{}$

Halves and Doubles Answers

Learning Intention: I can find halves and doubles

Halves and doubles are the opposite of each other. If we know half of 10 is 5, then we know that double 5 is 10!



$$\boxed{3} + \boxed{3} = \boxed{6}$$



half of $\boxed{6}$ is $\boxed{3}$

$$\boxed{4} + \boxed{4} = \boxed{8}$$

half of $\boxed{8}$ is $\boxed{4}$

$$\boxed{5} + \boxed{5} = \boxed{10}$$

half of $\boxed{10}$ is $\boxed{5}$



$$\boxed{6} + \boxed{6} = \boxed{12}$$

half of $\boxed{12}$ is $\boxed{6}$

$$\boxed{7} + \boxed{7} = \boxed{14}$$

half of $\boxed{14}$ is $\boxed{7}$




$$\boxed{8} + \boxed{8} = \boxed{16}$$

half of $\boxed{16}$ is $\boxed{8}$

Halves and Doubles

Learning Intention: I can find halves and doubles.

Halves and doubles are the opposite of each other. If we know half of 10 is 5, then we know that double 5 is 10!



$$\boxed{3} + \boxed{3} = \boxed{6}$$

half of $\boxed{6}$ is $\boxed{3}$

$$\boxed{4} + \boxed{4} = \boxed{}$$

half of $\boxed{}$ is $\boxed{}$


$$\boxed{5} + \boxed{} = \boxed{}$$

half of $\boxed{}$ is $\boxed{}$


Draw 12 fish



Draw 14 cats faces



Draw 16 paw prints



$$\boxed{} + \boxed{} = \boxed{}$$

half of $\boxed{}$ is $\boxed{}$

$$\boxed{} + \boxed{} = \boxed{}$$

half of $\boxed{}$ is $\boxed{}$




$$\boxed{} + \boxed{} = \boxed{}$$

half of $\boxed{}$ is $\boxed{}$

Halves and Doubles Answers

Learning Intention: I can find halves and doubles.

Halves and doubles are the opposite of each other. If we know half of 10 is 5, then we know that double 5 is 10!



$$\boxed{3} + \boxed{3} = \boxed{6}$$

half of $\boxed{6}$ is $\boxed{3}$

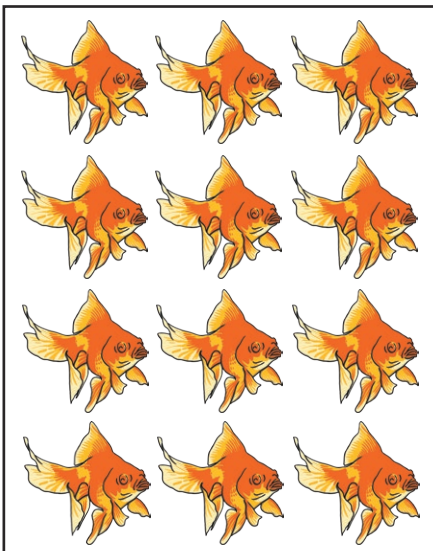
$$\boxed{4} + \boxed{4} = \boxed{8}$$

half of $\boxed{8}$ is $\boxed{4}$


$$\boxed{5} + \boxed{5} = \boxed{10}$$

half of $\boxed{10}$ is $\boxed{5}$

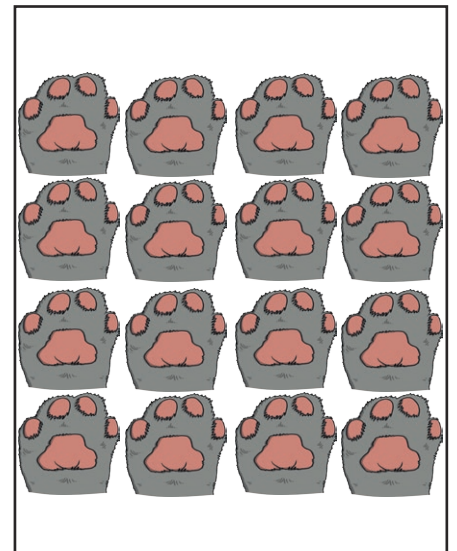
Draw 12 fish



Draw 14 cats faces



Draw 16 paw prints



$$\boxed{6} + \boxed{6} = \boxed{12}$$

half of $\boxed{12}$ is $\boxed{6}$

$$\boxed{7} + \boxed{7} = \boxed{14}$$

half of $\boxed{14}$ is $\boxed{7}$




$$\boxed{8} + \boxed{8} = \boxed{16}$$

half of $\boxed{16}$ is $\boxed{8}$

Halves and Doubles

Learning Intention: I can find halves and doubles

Halves and doubles are the opposite of each other. If we know half of 10 is 5, then we know that double 5 is 10!



$$\boxed{3} + \boxed{3} = \boxed{6}$$

half of $\boxed{6}$ is $\boxed{3}$

$$\boxed{} + \boxed{} = \boxed{}$$

half of $\boxed{}$ is $\boxed{}$

$$\boxed{} + \boxed{} = \boxed{}$$

half of $\boxed{}$ is $\boxed{}$

Draw the correct number of stars

Draw the correct number of squares

Draw the correct number of triangles

$$\boxed{} + \boxed{} = \boxed{20}$$

half of $\boxed{20}$ is $\boxed{}$

$$\boxed{9} + \boxed{} = \boxed{}$$

half of $\boxed{}$ is $\boxed{9}$




$$\boxed{} + \boxed{} = \boxed{14}$$

half of $\boxed{}$ is $\boxed{}$

Halves and Doubles Answers

Learning Intention: I can find halves and doubles.

Halves and doubles are the opposite of each other. If we know half of 10 is 5, then we know that double 5 is 10!



$$\boxed{3} + \boxed{3} = \boxed{6}$$

half of $\boxed{6}$ is $\boxed{3}$

$$\boxed{4} + \boxed{4} = \boxed{8}$$

half of $\boxed{8}$ is $\boxed{4}$

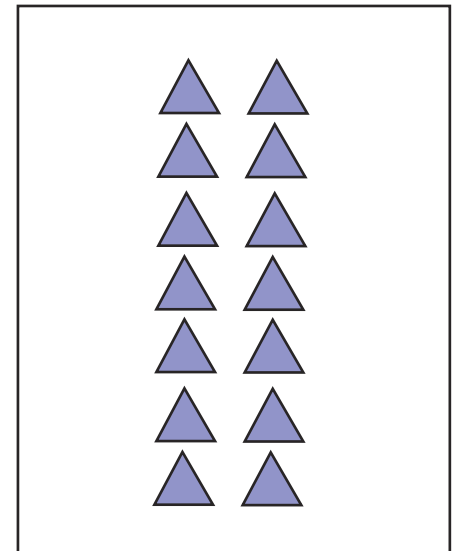
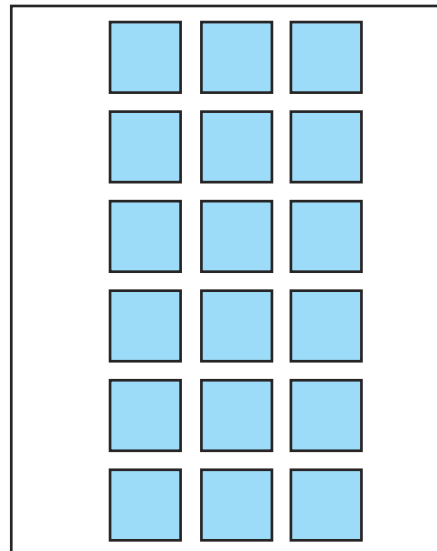
$$\boxed{5} + \boxed{5} = \boxed{10}$$

half of $\boxed{10}$ is $\boxed{5}$

Draw the correct number of stars

Draw the correct number of squares

Draw the correct number of triangles



$$\boxed{10} + \boxed{10} = \boxed{20}$$

half of $\boxed{20}$ is $\boxed{10}$

$$\boxed{9} + \boxed{9} = \boxed{18}$$

half of $\boxed{18}$ is $\boxed{9}$

$$\boxed{7} + \boxed{7} = \boxed{14}$$

half of $\boxed{14}$ is $\boxed{7}$