
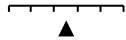




Name: _____

Date: _____

Class/Group: _____

A: Place Value, Add and Subtract		B: Multiply, Divide and Fractions		C: Measure and Geometry	
1. What is the missing number? 0 2 4 6 <input type="text"/> 10 12	2:1	11. $35 \div 5 =$	2:11	21. Estimate the weight of a banana. Write a, b or c. 	2:17
2. What is the value of the 4 in this number? 49	2:2	12. Which are the odd numbers? 3 6 9 12	2:11	a. about 15g b. about 150g c. about 15kg	
3. What number is labelled? 	2:3	13. What symbol is missing? $4 \square 6 = 24$	2:12	22. How many ten pence (10p) coins are the same value as a fifty pence (50p) coin? 	2:19
4. Which numbers are > 15 ? 12 14 16 18	2:4	14. What symbol is missing? $30 \div 6 \square 5$	2:12		
5. Write this number in numerals. fifty three	2:5	15. Is this true? Write 'yes' or 'no'. $10 \div 5 = 5 \div 10$	2:13	23. Katie has sixty pence (60p). She spends forty-five pence (45p). How much money does she have left?	2:20
6. There are 30 children in a class. 12 are girls. How many are boys?	2:6	16. 4 children share 32 sweets. How many sweets does each child get?	2:14		
7. $20 - 7 =$	2:7	17. 4 teams enter a 7-a-side contest. How many players are in the contest?	2:14	24. Which is longest? Write a, b, or c. a. an hour b. 80 minutes c. quarter of an hour	2:21
8. $58 - 10 =$	2:8	18. Write the fraction one half in numerals.	2:15		
9. Is this true? Write 'yes' or 'no'. $17 + 18 = 18 + 17$	2:9	19. How many quarters are in 2 whole ones?	2:15	25. Draw the hands to show Quarter to four. 	2:22
10. Use $65 + 18 = 83$ to help find: $83 - 18 = \square$	2:10	20. What is $\frac{1}{7}$ of 14 ?	2:16		
Total (A)		Total (B)		Total (C)	
Test Total (A+B+C)		R (0-9)	Y (10-19)	G (20-25)	