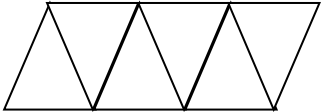

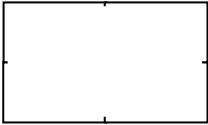


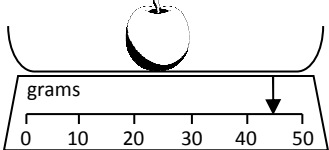

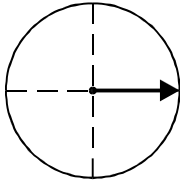


Name: _____

Date: _____

Class/Group: _____

A: Number and Place Value		B: Fractions and Measure		C: Measure and Geometry	
1. What is the missing number? 13 14 15 16 <input type="text"/>	1:1	11. Shade one half of this shape. 	1:11	16. I go swimming _____ I put on my swimming costume. a. before  b. after	1:16
2. What is the missing number? <input type="text"/> 10 15 20 25	1:2				
3. What number is one less than 99?	1:3	12. Draw two lines to split the shape into quarters. 	1:12	17. If Monday is the 1 st day of the week, what day is the 7 th day of the week? a. Friday b. Saturday c. Sunday	1:17
4. Pat has 12 sweets. Sam has 15. Who has the least ?	1:4				
5. Write this number in words: 20	1:5	13. Which is lightest ? 	1:13	18. What time does this clock show? 	1:18
6. What symbol is missing? 9 <input type="text"/> 6 = 3	1:6				
7. What is the missing number? 19 + <input type="text"/> = 20	1:7	14. How heavy is the apple? 	1:14	19. Draw a triangle on the grid.	1:19
8. 17 - 4 =	1:8				
9. What is the missing number? 16 = <input type="text"/> + 8	1:9	15. How much altogether? 	1:15	20. The arrow points: a. left b. down c. right 	1:20
10. There are 10 sweets in a bags. How many sweets do I get in 2 bags?	1:10				
Total (A)		Total (B)		Total (C)	
Test Total (A+B+C)		R (0-7)	Y (8-15)	G (16-20)	