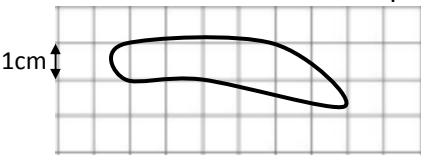
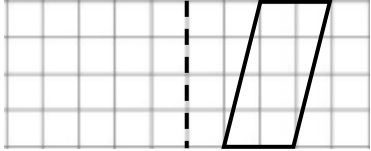

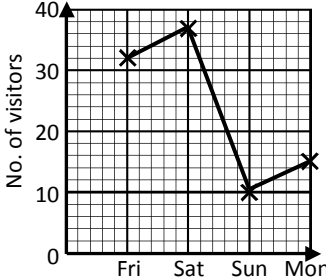


Name: _____

Date: _____

Class/Group: _____

A: Place Value, Add and Subtract		B: Multiply, Divide and Fractions		C: Measure, Geometry and Statistics	
1. What is the value of the 2 in this number? 2,934,765	5:1	11. Write all of the factors of 18.	5:8	21. If 1 kilogram is approximately 2.2 pounds, about how many kilograms are equal to 8.8 pounds?	5:20
2. Put these in order, smallest first: 212,285 32,956 110,000 85,253	5:1	12. Which of the following are prime numbers ? 3 4 7 15 18	5:9		
3. Round 163,824 to the nearest ten thousand .	5:2	13. 1,016 x 8	5:10	22. Estimate the area of this shape: 	5:21
4. What is the missing number? 117,250 107,250 <input type="text"/> 87,250	5:2	14. 9.2 ÷ 100	5:11		
5. Put these in order, smallest first: -3, 1, -5, 0, 4, -2	5:3	15. What is 3³ ?	5:12	23. Reflect the shape in the mirror line. 	5:28
6. What year is represented by these Roman Numerals? MCMXCV	5:4	16. Put these in order, smallest first: $\frac{3}{5}$ $\frac{7}{10}$ $\frac{8}{15}$	5:13		
7. 112,498 - 48,745 =	5:5	17. Find an equivalent fraction of $\frac{2}{4}$. 	5:14	24. Customers over a long weekend: How many customers were there on the busiest day? 	5:29
8. 34,857 + 79,384 =	5:5	18. Write the answer as a mixed number . $\frac{7}{8} + \frac{11}{8}$	5:15		
9. Complete this sum without written working. 15,200 - 2,050 =	5:6	19. $\frac{2}{9} \times 27 =$	5:16		
10. The temp. was -4°C. It rose by 9°C, then dropped by 4°C. What is it now?	5:7	20. Write 0.8 as a fraction.	5:17		
Total (A)		Total (B)		Total (C)	
Test Total (A+B+C)		R (0-9)	Y (10-19)	G (20-25)	