





Name: \_\_\_\_\_

Date: \_\_\_\_\_

Class/Group: \_\_\_\_\_

A: Place Value, Add and Subtract		B: Multiply, Divide and Fractions		C: Measure and Geometry	
1. What is the missing number? 0 2 4 6 8 <input type="text"/> 12	2:1	11. $60 \div 5 =$	2:11	21. <b>Estimate</b> the capacity of a glass. Write a, b or c. a. about 3 litres b. about 30 millilitres c. about 300 millilitres	2:17 
2. What is the <b>value</b> of the <b>7</b> in this number? 73	2:2	12. Which are the odd numbers? 7 14 21 28	2:11	22. How many two pence (2p) coins are the same value as a twenty pence (20p) coin? 	2:19
3. What number is labelled? 	2:3	13. What symbol is missing? $3 \square 9 = 27$	2:12		
4. Which numbers are <b>&lt; 12</b> ? 12 10 5 15	2:4	14. What symbol is missing? $21 \div 7 \square 3$	2:12	23. Katie has sixty pence (60p). She spends forty-five pence (45p). How much money does she have left?	2:20
5. Write this number in numerals. forty one	2:5	15. Is this true? Write 'yes' or 'no'. $30 \div 10 = 10 \div 30$	2:13		
6. There are 30 children in a class. 16 are girls. How many are boys?	2:6	16. 3 children share 18 sweets. How many sweets does each child get?	2:14	24. Which is longest? Write a, b, or c. a. half an hour b. 40 minutes c. three quarters of an hour	2:21
7. $20 - 15 =$	2:7	17. 8 teams enter a 5-a-side contest. How many players are in the contest?	2:14		
8. $82 - 10 =$	2:8	18. Write the fraction <b>one third</b> in numerals.	2:15	25. Draw the hands to show Ten minutes to six. 	2:22
9. Is this true? Write 'yes' or 'no'. $25 + 16 = 16 + 25$	2:9	19. <b>One quarter</b> of a cake is eaten. How many quarters are left?	2:15		
10. Use $14 + 58 = 72$ to help find: $72 - 58 = \square$	2:10	20. What is $\frac{1}{2}$ of 28 ?	2:16		
Total (A)		Total (B)		Total (C)	
Test Total (A+B+C)		R (0-9)	Y (10-19)		G (20-25)