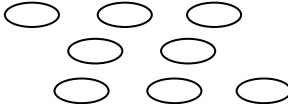
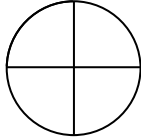

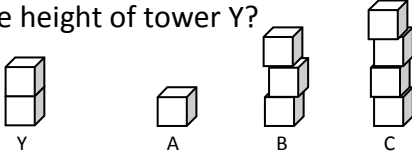
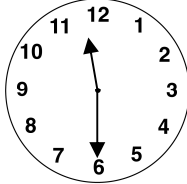
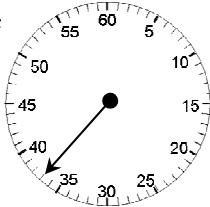





Name: \_\_\_\_\_

Date: \_\_\_\_\_

Class/Group: \_\_\_\_\_

A: Number and Place Value		B: Fractions and Measure		C: Measure and Geometry	
1. What is the missing number? 72 73 74 <input type="text"/> 76	1:1	11. Colour in $\frac{1}{2}$ of the counters. 	1:11	16. If tomorrow is Monday, then Sunday... a. was yesterday b. is today c. is tomorrow.	1:16
2. What is the missing number? 2 4 6 8 <input type="text"/>	1:2				
3. What number is one <b>more</b> than 38?	1:3	12. Colour in $\frac{1}{4}$ of the shape. 	1:12	17. What month comes <b>before</b> April? a. February b. May c. March	1:17
4. What number is labelled? 	1:4				
5. Write this number in words: 18	1:5	13. Which tower is <b>half</b> the height of tower Y? 	1:13	18. What time does this clock show? 	1:18
6. What symbol is missing? 7 <input type="text"/> 4 = 11	1:6				
7. What is the missing number? 15 + <input type="text"/> = 20	1:7	14. A boy timed himself running a race. How many seconds did he take to finish? 	1:14	19. What is this shape? a. cuboid b. pyramid c. sphere 	1:19
8. 18 - 9 =	1:8				
9. There are 15 people on a bus. 9 get off. How many people are there now?	1:9	15. How much altogether? 	1:15	20. The teddy bear is: a. on the chair. b. behind the chair. c. next to the chair. 	1:20
10. 12 pens are shared by 4 children. How many pens do they get each?	1:10				
Total (A)		Total (B)		Total (C)	
Test Total (A+B+C)		R (0-7)	Y (8-15)	G (16-20)	