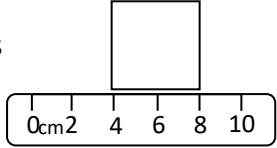
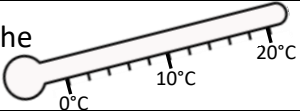
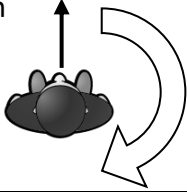
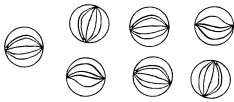
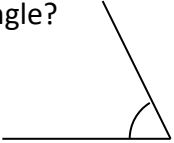
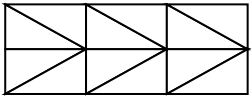
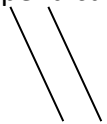
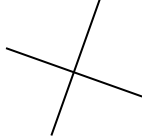


Big Maths Year 3

Name: _____

Date: _____

Class/Group: _____

A: Place Value, Add and Subtract		B: Multiply, Divide and Fractions		C: Measure and Geometry	
1. What is 10 less than this number? 106	3:1	11. $64 \div 8 =$	3:10	23. How many grams are there in 2 and a half kilograms?	3:19
2. What is the 6 worth in this number? 962	3:2	12. $6 \times 4 =$	3:10		
3. Write < or > to make this correct: 245 <input type="text"/> 254	3:3	13. $32 \times 2 =$	3:11	22. What is the perimeter of this square? 	3:20
4. Show 8°C on the thermometer. 	3:4	14. There are 3 girls for every 2 boys. If there are 10 boys, how many girls?	3:12		
5. Make the largest number possible using the digits 6 3 and 8.	3:5	15. What is one tenth of 12?	3:13	23. Ian turns through half a turn. How many degrees has he turned through? 	3:26
6. $299 + 1 =$	3:6	16. Circle $\frac{5}{7}$ of the marbles. 	3:14		
7. $389 - 237 =$	3:7	17. What is $\frac{2}{5}$ of 25?	3:15	24. Is this angle bigger or smaller than a right angle? 	3:27
8. Circle the best estimate to $119 - 58$: 60 70 80 90	3:8	18. $\frac{4}{12} = \frac{?}{3}$ 	3:16		
9. A school has 700 tickets to sell for a play. They sell 537. How many left?	3:9	19. Add the fractions. $\frac{2}{7} + \frac{4}{7}$	3:17	25. Which pair of lines are perpendicular? a.  b. 	3:28
10. What is the missing number? $33 + \square - 24 = 27$	3:9	20. Write the largest fraction. $\frac{1}{5}$ $\frac{1}{3}$ $\frac{1}{4}$ $\frac{1}{2}$	3:18		
Total (A)		Total (B)		Total (C)	
Test Total (A+B+C)		R (0-9)		Y (10-19)	
				G (20-25)	