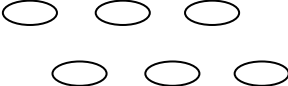

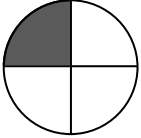

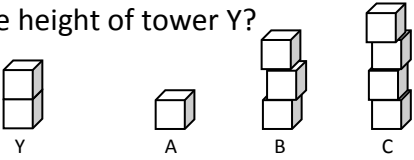
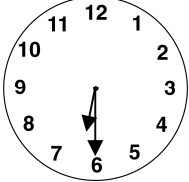
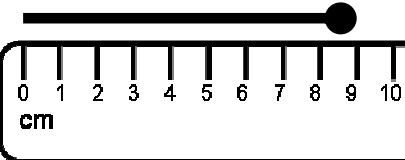





Name: _____

Date: _____

Class/Group: _____

A: Number and Place Value		B: Fractions and Measure		C: Measure and Geometry		
1. What is the missing number? 22 21 20 <input type="text"/> 18	1:1	11. Colour in $\frac{1}{2}$ of the counters. 	1:11	16. I finish school in the: a. morning b. afternoon c. evening.		1:16
2. What is the missing number? 2 4 6 <input type="text"/> 10	1:2					
3. What number is one more than 59?	1:3	12. What fraction of this shape has been coloured in? 	1:12	17. What month comes after April? a. February b. May c. March		1:17
4. What number is labelled? 	1:4					
5. Write this number in words: 13	1:5	13. Which tower is double the height of tower Y? 	1:13	18. What time does this clock show? 		1:18
6. What symbol is missing? 5 <input type="text"/> 3 = 2	1:6					
7. What is the missing number? 9 + <input type="text"/> = 20	1:7	14. How long is the matchstick? 	1:14	19. What is this shape? a. cuboid b. pyramid c. sphere 		1:19
8. 16 - 7 =	1:8					
9. Tom has 10 apples. Kim has 5 apples. How many apples altogether?	1:9	15. How much altogether? 	1:15	20. The teddy bear is: a. on the chair. b. under the chair. c. next to the chair. 		1:20
10. 9 pens are shared by 3 children. How many pens do they get each?	1:10					
Total (A)		Total (B)		Total (C)		
Test Total (A+B+C)		R (0-7)	Y (8-15)	G (16-20)		